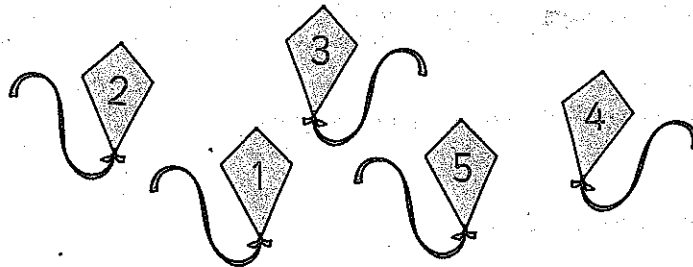



Warm up

1. Join up the kites in the right order.



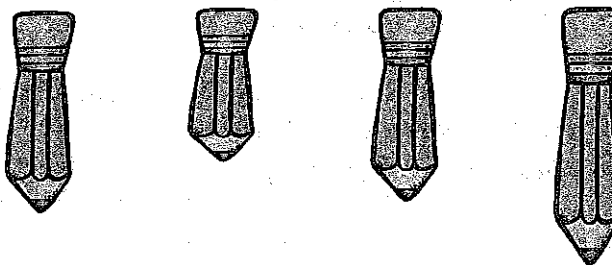
2 marks

2. Draw five crosses (X) in the box.




1 mark

3. Circle the smallest pencil.



1 mark

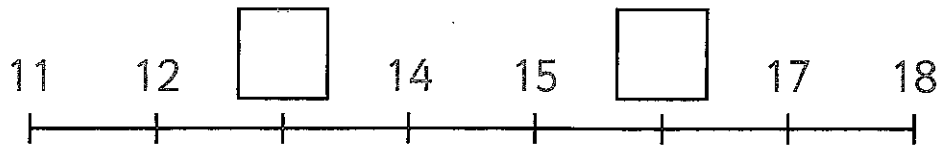
4. What is 3 add 4?



$3 + 4 = \dots\dots\dots$


1 mark

5. Fill in the missing numbers on the number line.



2 marks

6. Look at these animals.



How many squirrels are there?

..... squirrels

1 mark

How many birds are there?

..... birds

1 mark

How many animals are there altogether?

..... animals


1 mark

7. Ben and Raj each think of a number.

Ben's number is one more than 6.

Raj's number is one more than Ben's number.

What numbers are Ben and Raj thinking of?



Ben

Raj

2 marks

Score: